

Name _____

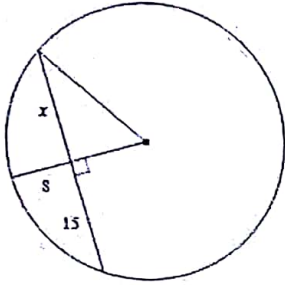
Analytic Geometry

Date _____ Period _____

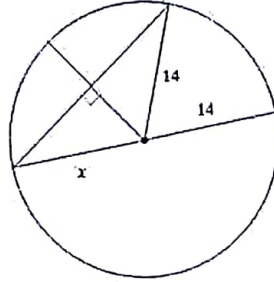
Module 12 Review

Find the length of the segment indicated. Round your answer to the nearest tenth if necessary.

1)

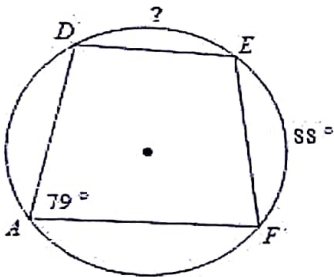


2)

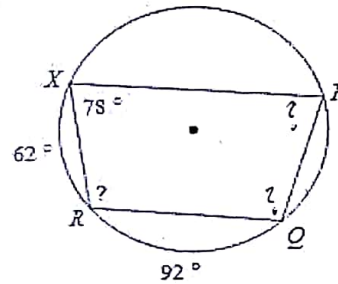


Find the measure of the arc or angle indicated.

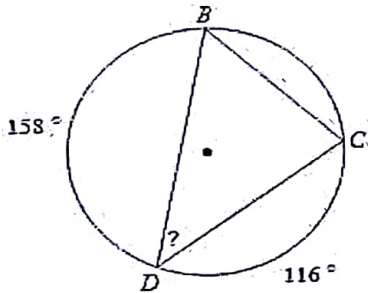
3)



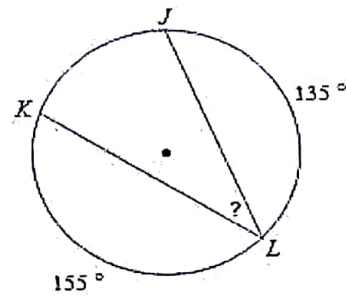
4)



5)



6)

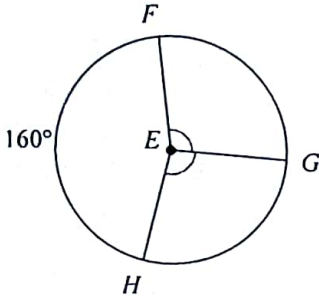


7) What do you know about the opposite angles of a quadrilateral inscribed in a circle?

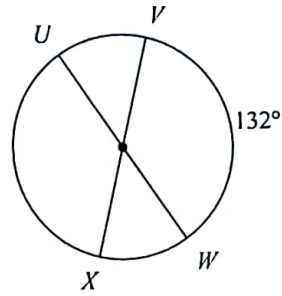
8) If the area of a sector is 108π and the central angle is 270° , what is the radius?

Find the measure of the arc or central angle indicated. Assume that lines which appear to be diameters are actual diameters.

1) $m\angle GEH$

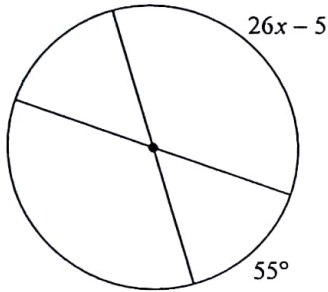


2) $m\widehat{XUW}$

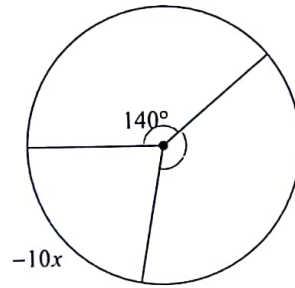


Solve for x . Assume that lines which appear to be diameters are actual diameters.

3)

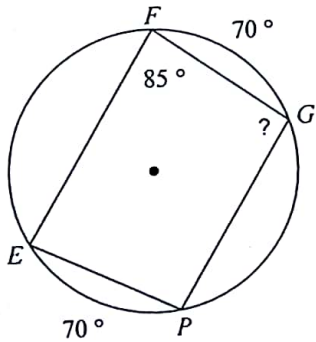


4)

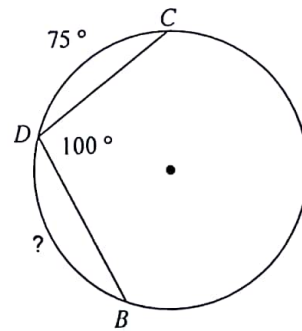


Find the measure of the arc or angle indicated.

5)

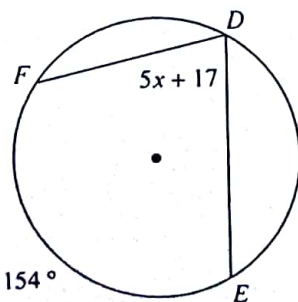


6)

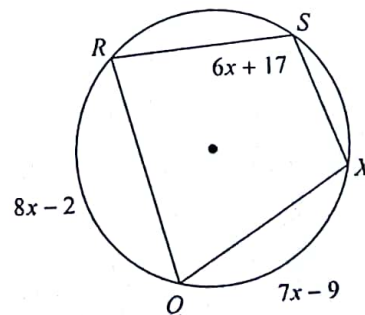


Solve for x .

7)

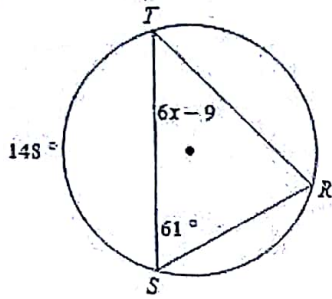


8)

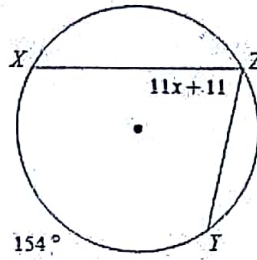


Solve for x .

7)

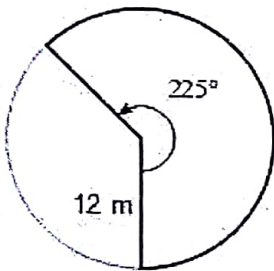


8)

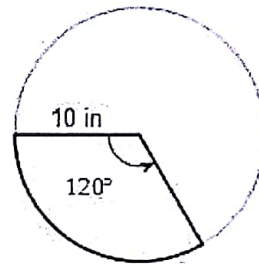


Find the area of each sector. Round your answers to the nearest tenth, in terms of π

5)

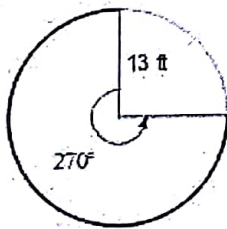


6)

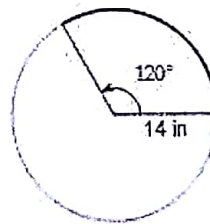


Find the length of each arc, in terms of π

13)

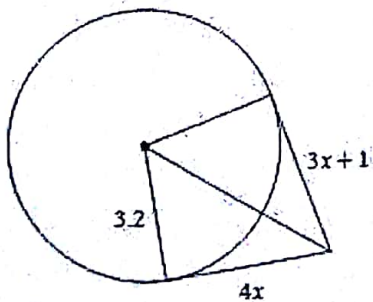


14)

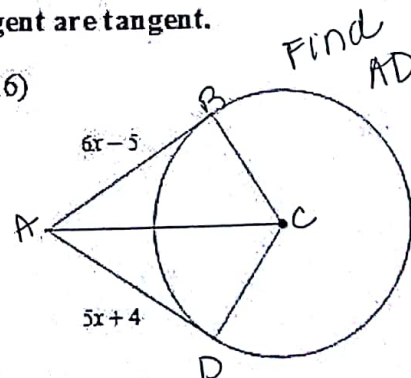


Solve for x . Assume that lines which appear to be tangent are tangent.

15)

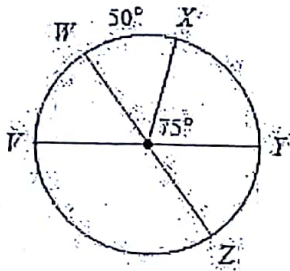


16)

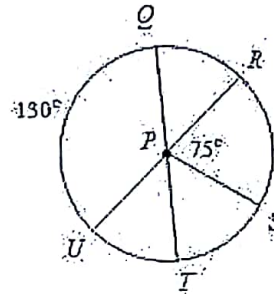


Find the measure of the arc or central angle indicated. Assume that lines which appear to be diameters are actual diameters.

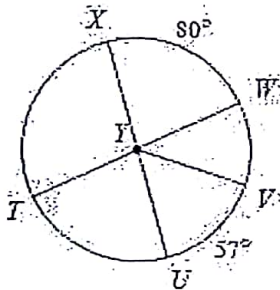
17) $m\widehat{ZX}$



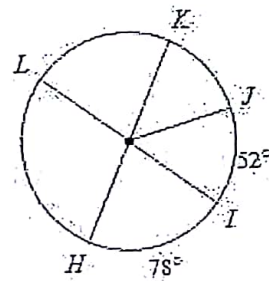
18) $m\angle QPR$



19) $m\angle WYV$

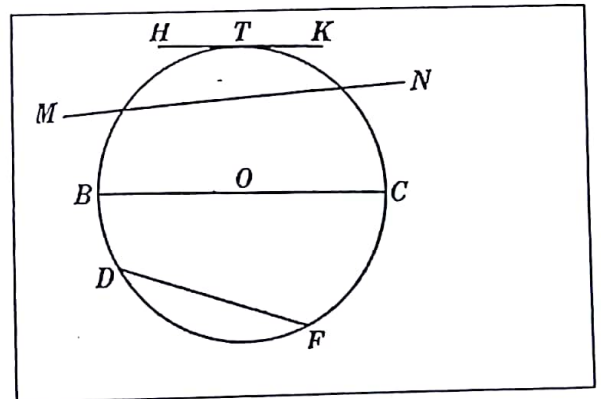


20) $m\widehat{JHK}$

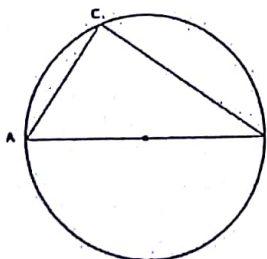


21) Name the following:


- a. Diameter
- b. Radii
- c. Tangent
- d. Chord
- e. Secant



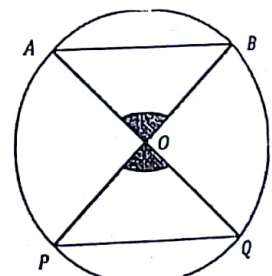
22) $m\angle ACB = 5x - 10$, solve for x .



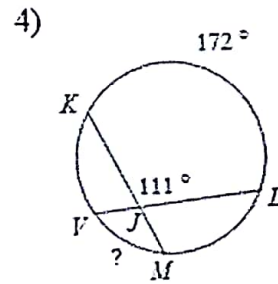
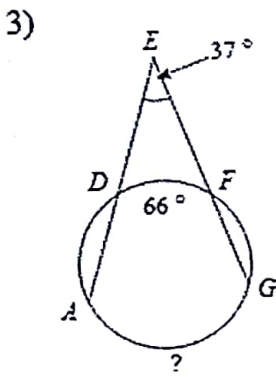
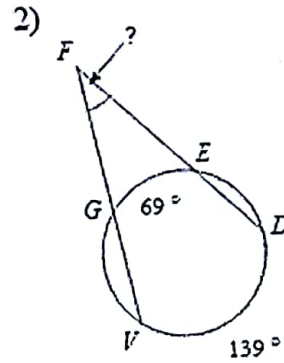
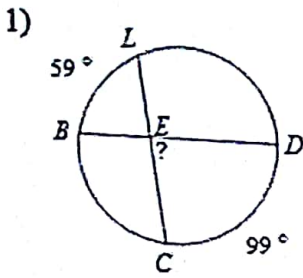
23,



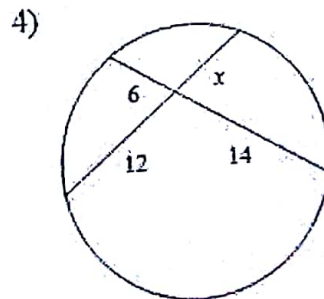
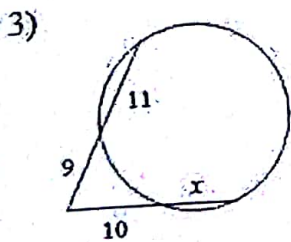
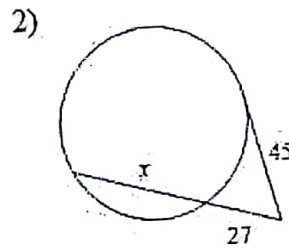
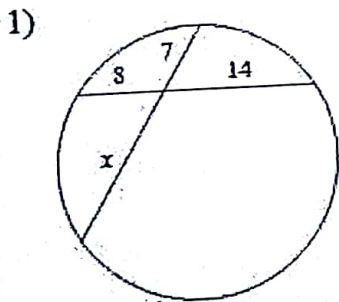
24) $AB = 3x$, $PQ = 5x - 10$. Find x .



Find the measure of the arc or angle indicated. Assume that lines which appear tangent are tangent.

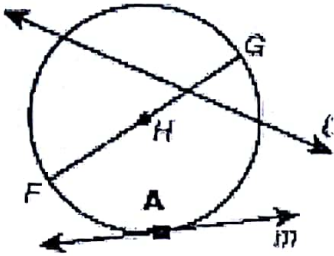


Solve for x . Assume that lines which appear tangent are tangent.



1. Identify each point, segment, or line as one of the following:

Point of Tangency	Tangent	Secant	Radius	Diameter	Center
-------------------	---------	--------	--------	----------	--------



line l _____

line m _____

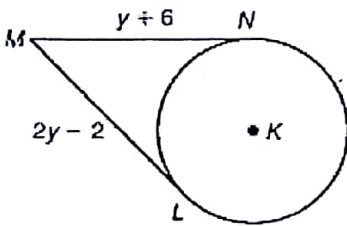
H _____

A _____

\overline{HG} _____

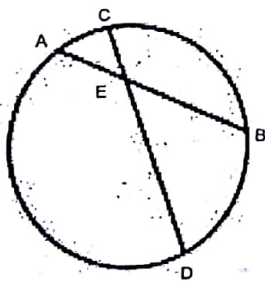
\overline{FG} _____

2. Solve for y .

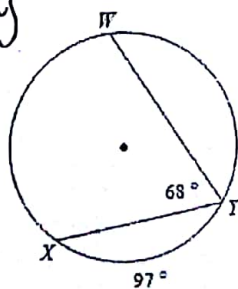


$y =$ _____

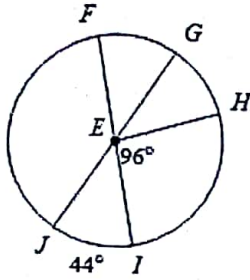
3. If $AE = 4$, $AB = 16$, and $ED = 8$. Find the value of CD .



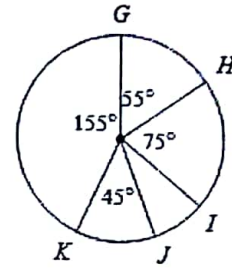
4. Find the measure of $\angle X$ *WU*



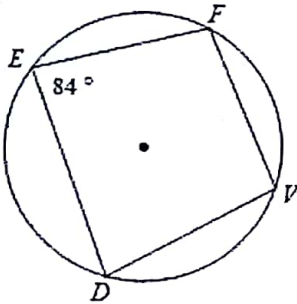
5. Find the measure of $\angle JEI$



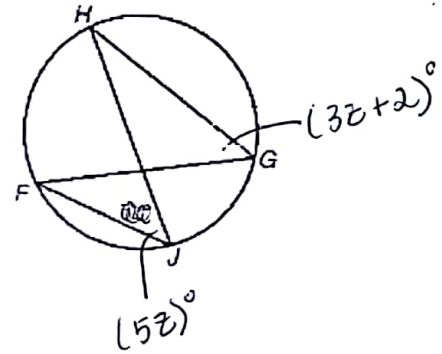
6. Find the measure of \widehat{IJ}



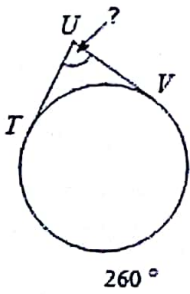
7. Find the measure of $\angle V$



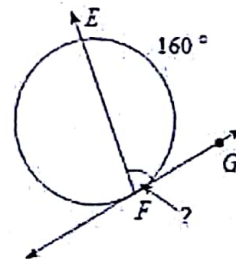
8. Find the measure of $\angle FGH + \widehat{FH}$



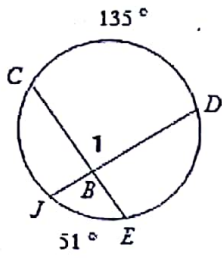
9. Find the measure of $\angle U$

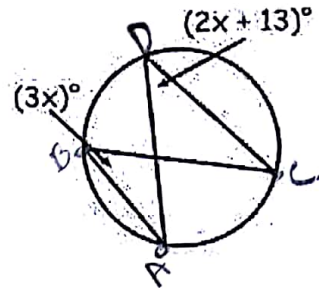


10. Find the measure of $\angle EFG$



11. Find the measure of $\angle 1$

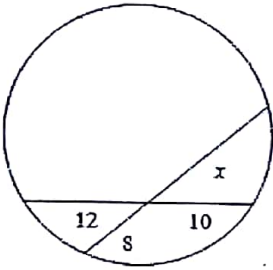




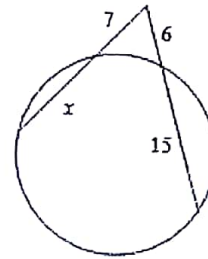
$x =$ _____
 $m\widehat{AC} =$ _____
 $m\angle ABC =$ _____

Find the value of x .

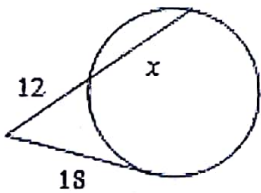
12.



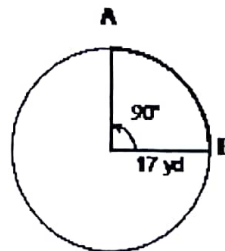
13.



14.



15. Find the length of arc AB and the area of the sector.
 in terms of π .



Length of \widehat{AB} : _____

Sector Area of AB: _____